



Name \_\_\_\_\_

Date \_\_\_\_\_ # \_\_\_\_\_

2nd Grade Math Basic Test 1- <http://www.prepdog.org/2nd/2mb1.htm>

#	Answer	Show me how your brain works. Explain or sketch how you solved the problem.	Understanding
1.			 
2.			 
3.			 
4.			 
5.			 
6.			 
7.			 
8.			 
9.			 

10.			 
11.			 
12.			 
13.			 
14.			 
15.			 

Total correct: \_\_\_\_/15

Draw the following problem: **John has 4 apples and Susan has 3 apples, how many apples will John and Susan have if they put all their apples in one basket?**



Name \_\_\_\_\_

Date \_\_\_\_\_ # \_\_\_\_\_


2nd Grade Math Basic Test 2- <http://www.prepdog.org/2nd/2mb2.htm>

#	Answer	Show me how your brain works. Explain or sketch how you solved the problem.	Understanding
1.			 
2.			 
3.			 
4.			 
5.			 
6.			 
7.			 
8.			 
9.			 

10.			 
11.			 
12.			 
13.			 
14.			 
15.			 

Total correct: \_\_\_\_/15

Draw the following problem: **Max finds 20 eggs in the chicken house, and 5 eggs in the yard. If Max places all the eggs in a basket how many eggs does Max have all together?**

















Name \_\_\_\_\_

Date \_\_\_\_\_ # \_\_\_\_\_


2nd Grade Math Basic Test 3- <http://www.prepdog.org/2nd/2mb3.htm>

#	Answer	Show me how your brain works. Explain or sketch how you solved the problem.	Understanding
1.			 
2.			 
3.			 
4.			 
5.			 
6.			 
7.			 
8.			 
9.			 

10.			 
11.			 
12.			 
13.			 
14.			 
15.			 

Total correct: \_\_\_\_/15

Draw a house with a triangle top (3 sides), and a rectangle bottom (4 sides)?






Name \_\_\_\_\_

Date \_\_\_\_\_ # \_\_\_\_\_

2nd Grade Math Basic Test 4- <http://www.prepdog.org/2nd/2mb4.htm>

#	Answer	Show me how your brain works. Explain or sketch how you solved the problem.	Understanding
1.			 
2.			 
3.			 
4.			 
5.			 
6.			 
7.			 
8.			 
9.			 

10.			 
11.			 
12.			 
13.			 
14.			 
15.			 

Total correct: \_\_\_\_/15

Draw a clock that shows the time as 1:15? Make sure your clock has a large and a small hand.

















Name \_\_\_\_\_

Date \_\_\_\_\_ # \_\_\_\_\_


2nd Grade Math Basic Test 5- <http://www.prepdog.org/2nd/2mb5.htm>

#	Answer	Show me how your brain works. Explain or sketch how you solved the problem.	Understanding
1.			 
2.			 
3.			 
4.			 
5.			 
6.			 
7.			 
8.			 
9.			 

10.			 
11.			 
12.			 
13.			 
14.			 
15.			 

Total correct: \_\_\_\_/15

Draw a box with six parts and shade or color 1/6 of the box.





Name \_\_\_\_\_

Date \_\_\_\_\_ # \_\_\_\_\_


2nd Grade Math Basic Test 6 - <http://www.prepdog.org/2nd/2mb6.htm>

#	Answer	Show me how your brain works. Explain or sketch how you solved the problem.	Understanding
1.			 
2.			 
3.			 
4.			 
5.			 
6.			 
7.			 
8.			 
9.			 

10.			 
11.			 
12.			 
13.			 
14.			 
15.			 

Total correct: \_\_\_\_/15

**Draw a graph** to show the following: John has 5 kick balls, Susan has 2 kick balls, Sam has 1 kick ball, and Jerome has 3 kick balls. Who has the most kick balls?





Name \_\_\_\_\_

Date \_\_\_\_\_ # \_\_\_\_\_

2nd Grade Math Basic Test 7 - <http://www.prepdog.org/2nd/2mb7.htm>

#	Answer	Show me how your brain works. Explain or sketch how you solved the problem.	Understanding
1.			 
2.			 
3.			 
4.			 
5.			 
6.			 
7.			 

Total correct: \_\_\_\_/7

**Draw a graph** to show the following: In June Merrin went to the water park 3 times, in July 4 times, August 2 times, and 1 time in September. Which month did Merrin spend the most time at the water park?



<http://www.prepdog.org/2nd/2mb7.htm>

Prepdog.org- copyright 2014